

Aptitude Test Sample Questions

English Language:

1. Put plants _____ a window so they will get enough light.

- A. near to
- B. near of
- C. next to
- D. nearly

2. Yesterday they _____ very well in class.

- A. do
- B. does
- C. will do
- D. did

5. Joanna _____ her new mobile phone.

- A. did lost
- B. has lost
- C. is losing
- D. loses

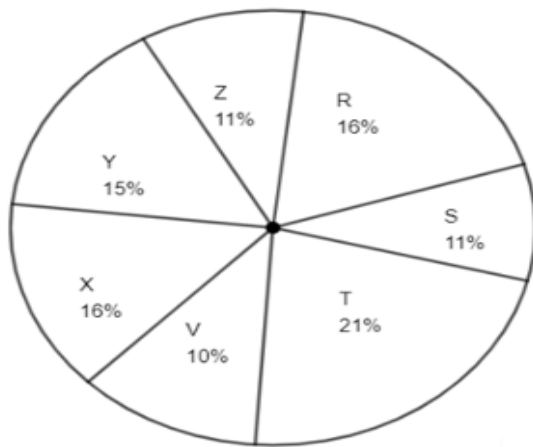
Mathematics:

1. Complete the following sequence series:

22 12 10 35 ?? 16 34 23 11

- A. 26
- B. 13
- C. 19
- D. 14

2. If the population of village R in 1997 was 32000, then what would be the population of village Y?



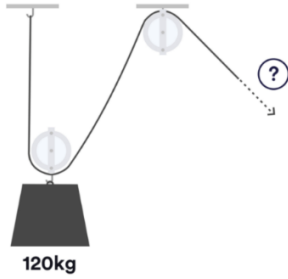
- A. 30000
- B. 16000
- C. 20000
- D. 31000

3. Gary answered all 70 questions on his final exam. If he scored 79% on the test, how many questions did he get right?

- A. 49
- B. 22
- C. 18
- D. 55

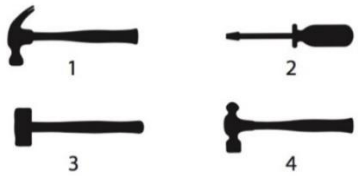
Mechanical Reasoning:

1. Approximately how much force is needed to lift the weight?



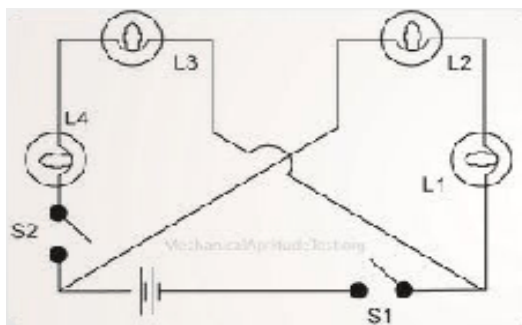
- A. 30kg
- B. 45kg
- C. 60kg
- D. 90kg

2. Which hammer is most suitable for general work with metal?



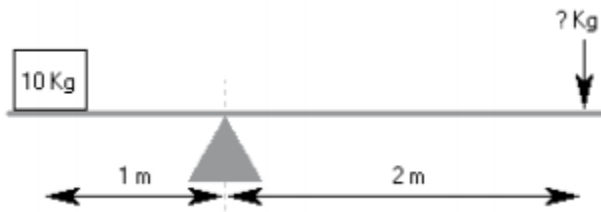
- A. 1
- B. 2
- C. 3
- D. 4

3. You are asked to turn on L4. What must you do?



- A. Turn on S1
- B. It should be on
- C. Turn on S1 & S2
- D. Turn on S2

4. How much weight is required to balance the lever?



- A. 15kg
- B. 5kg
- C. 10kg
- D. 7.5kg